

## ENGLISH

Q.1 Paste the picture of your grandfather/grandmother. Take her/his interview and write at least in 100 words.

Q.2 write at least fifteen sentences describing how you have helped your parents during the vacation.

Q.3 Read a moral story and writes the summary of it in your own words.

Q.4 Write any fifteen commonly used words and their meanings as well as their opposites.

Q.5 Write any ten lines about your visit to your maternal grandparents' home with some of the clicks of the moments.

## HINDI

1 पेंसिल तथा रबड़ के बीच बातचीत (संवाद) लिखिए। दस संवाद लिखने आवश्यक हैं।

2 अकबर व बीरबल की कोई एक कहानी याद करनी है। कक्षा में यह कहानी सुनी जाएगी व अंक दिए जाएँगे।

## MATHEMATICS

### TASK NO.-1

1. Make an arch using bricks.
2. Draw two wall patterns using bricks.
3. Make any two floor patterns using color paper and stick it below.

### TASK NO.-2

1. Make any six, five-digit numerals using the given digits of numbers.

Note: **digits can be repeated only once.**

Digits are.....6, 8, 5, 4, 3, 2

a ..... b .....

c ..... d .....

e ..... f .....

2. Use the digits to make greatest and smallest number.

Note: **digits should not be repeated**

DIGITS	GREATEST NUMBER	SMALLEST NUMBER
5, 9, 0, 6, 7		
8, 3, 7, 2		
0, 9, 1		
7, 5, 1, 2, 3		

3. Fill in the blanks:

- (a) Smallest and greatest 2-digit number ....., .....
- (b) Smallest and greatest 5-digit number ....., .....
- (c) Smallest and greatest 3-digit number ....., .....
- (d) Smallest and greatest 4-digit number ....., .....

**TASK NO .-3**

Complete the table and answer the questions below

S. No.	Name of the plant	Last month height	This month height	Cms-grown
1	TULSI	5cm	8cm	
2	MANGO	10cm	13cm	
3	BAMBOO	20cm	38cm	
4	ROSE	32cm	32cm	

- (a) The plant which has grown maximum is .....
- (b) The plant which has grown minimum is .....
- (c) The plant which has not grown .....
- (d) The plant which has grown by 18cm is .....
- (e) This month ..... plant is taller than .....

Read the following table and answer the following question

S. No.	Names	Distance of sixes in a cricket match
1	SACHIN	90m
2	YUVARAJ	101m 5cm
3	GAMBHIR	52m 25cm

(a) What is the difference between the distance hit by Sachin and Yuvraj?



### ENVIRONMENTAL STUDIES


1. Write the name of 5 animals in the table below

S.N	Ears can be seen	Has hair on skin	Ears can not be seen	Has feathers on skin
1.				
2.				
3.				
4.				
5.				

2. Write the names of five animals each which give birth to babies and lay eggs to produce babies-

S.No.	GIVE DIRECT BIRTH	LAY EGGS
1		
2		
3		
4		
5		

3. Given below are the names of some games. Draw  for Indoor games and  for outdoor games. Also write the number of players and the materials required to play these games.

Name of the game	 	Number of players	Things required
Chess			
Football			
Cricket			
Hockey			
Badminton			
Lawn Tennis			
Carrom			
Kho-Kho			
Basketball			
Rugby			
Baseball			
Wrestling			